

Name: _____

Division

Date: _____

1.

$$2 \overline{)6}$$

2.

$$3 \div 3 =$$

3.

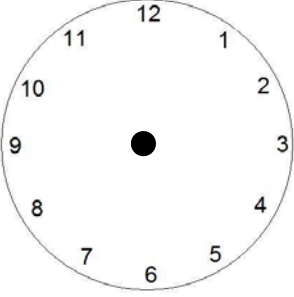
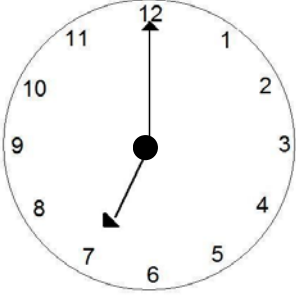
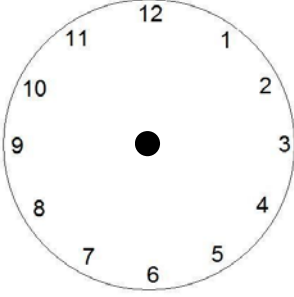
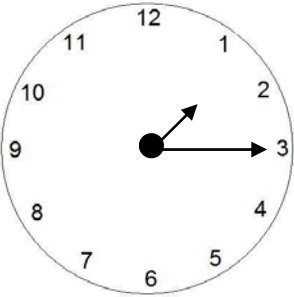
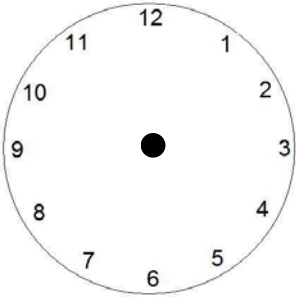
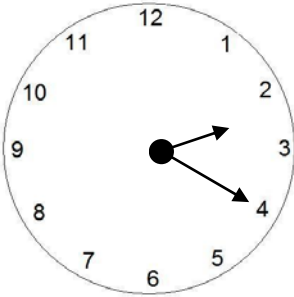
$$2 \overline{)10}$$

4.

$$24 \div 6 =$$

| |
|--|
| For Teacher Use Only |
| Number Correct: _____ Percent Correct: _____ Indicate which skills are Mastered (M); Emerging (E); Failed (F) Mastered = both problems correct; Failed = both incorrect; Emerging = only one correct <input type="checkbox"/> Single digits <input type="checkbox"/> Double digit by single digit |

Time

| | | |
|---|--|---|
| 1. Draw the clock hands  2:00 | 2. What time is it?  _____ | 3. Draw the clock hands  4:45 |
| 4. What time is it?  _____ | 5. Draw the clock hands  6:30 | 6. What time is it?  _____ |

| |
|---|
| Number Correct: _____ Percent Correct: _____ Indicate which skills are Mastered (M); Emerging (E); Failed (F) Mastered = both problems correct; Failed = both incorrect; Emerging = only one correct <input type="checkbox"/> Time to the hour <input type="checkbox"/> Time to the half hour <input type="checkbox"/> Time to quarter hour <input type="checkbox"/> Time to 5 minutes |
|---|