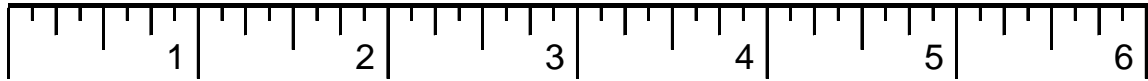


Name: _____

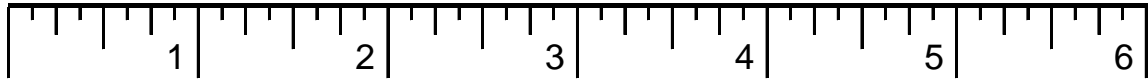
Measurement

Date: _____

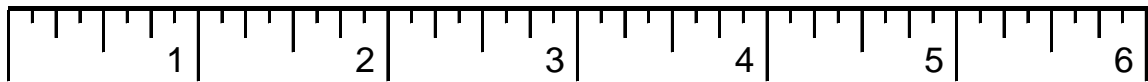
1. On the ruler below, draw a line at 3 inches.



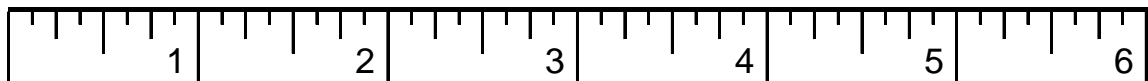
2. Draw a line at $4 \frac{1}{2}$ inches



3. Draw a line at $1 \frac{1}{4}$ inches



4. Draw a line at $5 \frac{1}{8}$ inches



For Teacher Use Only

Number Correct: _____ Percent Correct: _____

Indicate which skills are Mastered (M); Failed (F)

___ Whole units ___ $\frac{1}{2}$ units ___ $\frac{1}{4}$ units ___ units