

Name: _____

Division

Date: _____

1.

$$2 \overline{)4}$$

2.

$$5 \div 5 =$$

3.

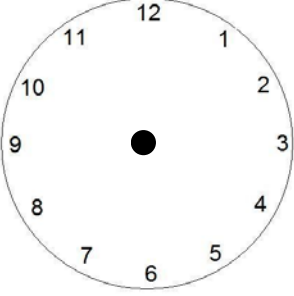
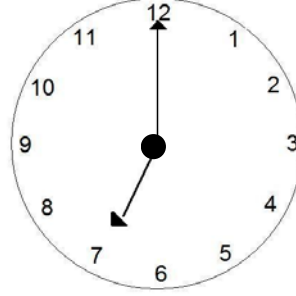
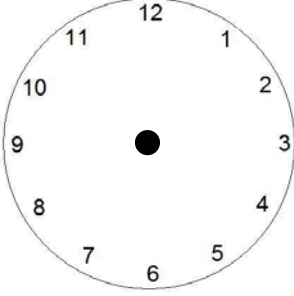
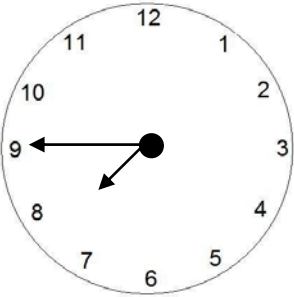
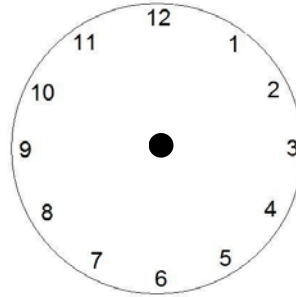
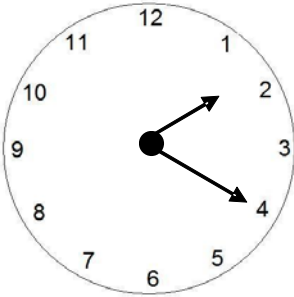
$$2 \overline{)8}$$

4.

$$24 \div 8 =$$

For Teacher Use Only
Number Correct: _____ Percent Correct: _____ Indicate which skills are Mastered (M); Emerging (E); Failed (F) Mastered = all problems correct; Failed = all problems incorrect; Emerging = two or less correct <input type="checkbox"/> Single digits <input type="checkbox"/> Double digit by single digit

Time

<p>1. Draw the clock hands</p>  <p style="text-align: center;">3:00</p>	<p>2. What time is it?</p>  <p style="text-align: center;">_____</p>	<p>3. Draw the clock hands</p>  <p style="text-align: center;">11:30</p>
<p>4. What time is it?</p>  <p style="text-align: center;">_____</p>	<p>5. Draw the clock hands</p>  <p style="text-align: center;">4:45</p>	<p>6. What time is it?</p>  <p style="text-align: center;">_____</p>

Number Correct: _____ Percent Correct: _____ Indicate which skills are Mastered (M); Failed (F) Mastered = all problems correct; Failed = all incorrect; Emerging = one correct <input type="checkbox"/> Time to the hour <input type="checkbox"/> Time to the half hour <input type="checkbox"/> Time to quarter hour <input type="checkbox"/> Time to 5 minutes
--